


Please help your child to count the objects in each box and then record what is one less and one more than this initial number.

For example...

One less..


Total number of objects..



One more..

One less..


Total number of objects..



One more..

One less..


Total number of objects..



One more..

One less..


Total number of objects..



One more..

One less..

Total number of objects..



One more..